


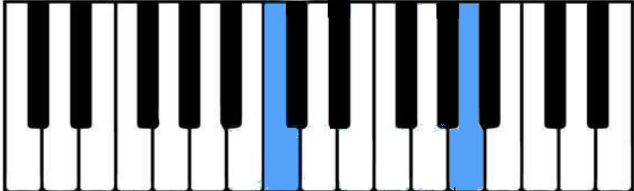
1.4 Major and Minor Sixths

An interval that is 8 half steps away is called a **Minor Sixth**. An interval that is 9 half steps away is called a **Major Sixth**.

Minor Sixth



Major Sixth




Minor Sixth

Major Sixth

Practice Assignment 1

In the spaces below, mark if the interval is a *Minor Sixth (m6)* or a *Major Sixth (M6)*.

1. 2. 3. 4. 5. 6. 7.



Practice Assignment 2

In the spaces below, mark if the interval is a *Minor Second (m2)*, *Major Second (M2)*, *Minor Third (m3)*, *Major Third (M3)*, *Perfect Fourth (P4)*, *Tritone (T)*, *Perfect Fifth (P5)*, *Minor Sixth (m6)* or a *Major Sixth (M6)*.

1. 2. 3. 4. 5.



6. 7. 8. 9. 10.